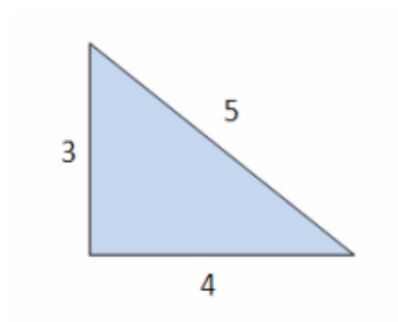
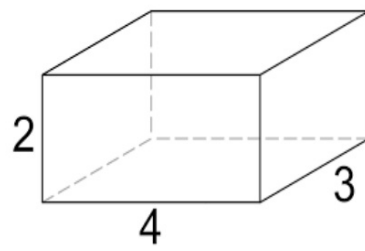


A formula for volume

Connect - formulas

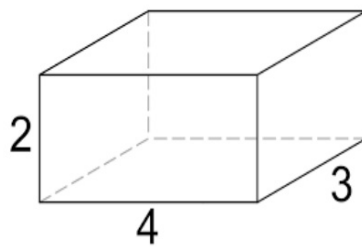


Connect - volume



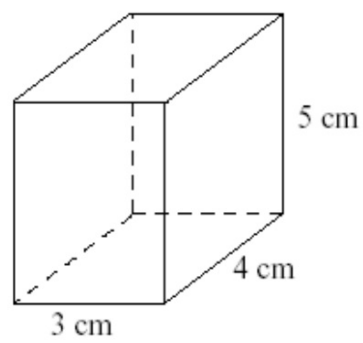
I do

How many unit cubes can this hold?



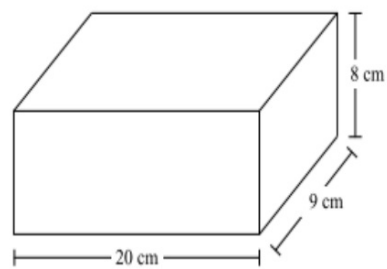
We do

How many 1 cm cubes can this hold?



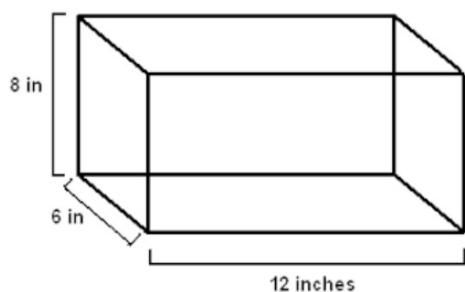
We do

How many 1 cm cubes can this hold?



**You do together
on whiteboard**

Find the number of 1-
inch cubes this can
hold using the
volume formula for
rectangular prisms



**You do alone on
index card**

Find the number of 1-
inch cubes this can
hold using the
volume formula for
rectangular prisms

