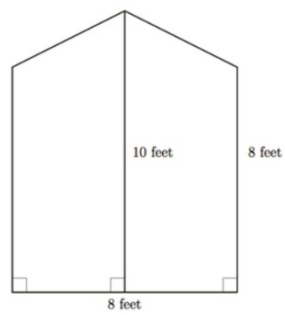


Finding the area of complex figures

**Connect**

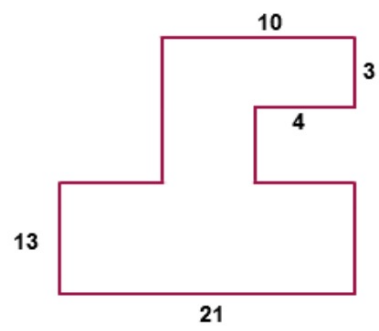
**I do**

Jamie is planning to cover a wall with red wallpaper. The dimensions of the wall are shown below:

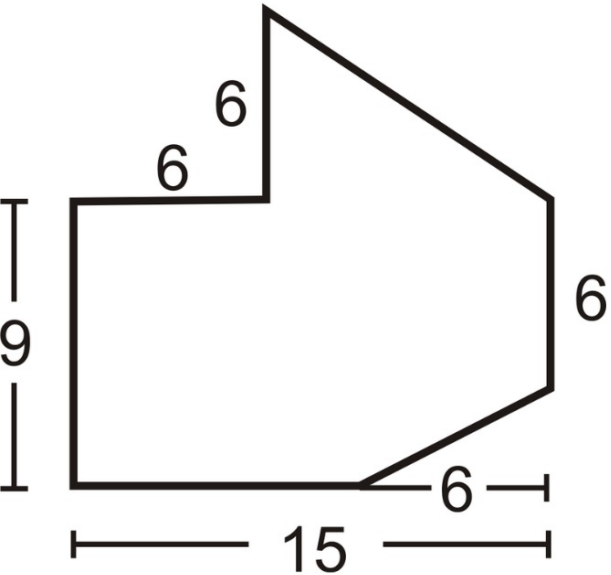


- a. How many square feet of wallpaper are required to cover the wall?

**We do**



You do together  
on whiteboard



You do alone on  
index card

