

Identifying features of polygons

↓
shapes

Connect

obtuse
more than 90°




acute
less than 90



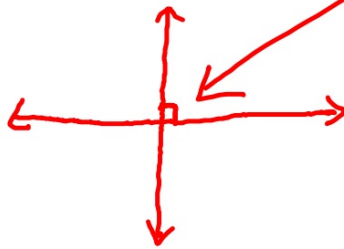
right
exactly 90°



intersecting



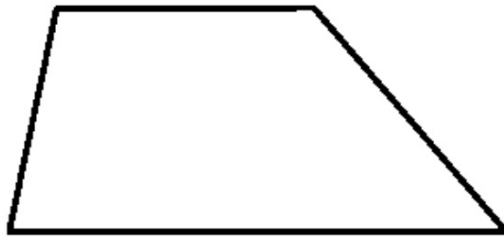
perpendicular



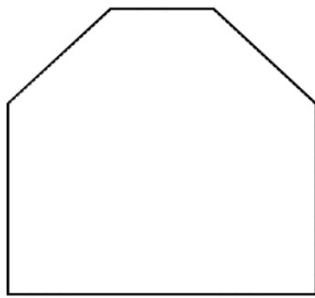
parallel



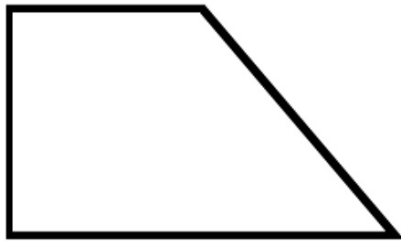
I do



I do



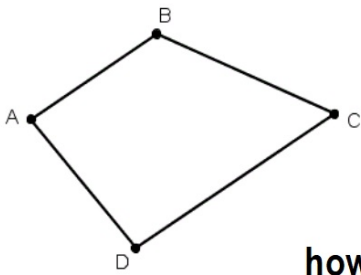
We do



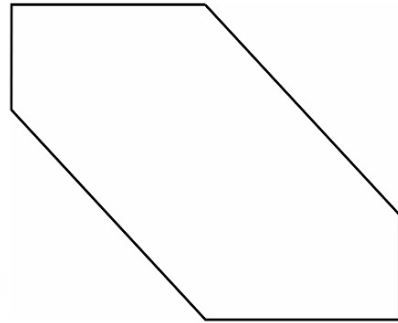
We do



**You do together
on whiteboard**



**You do alone on
index card**



**how many line segments?
How many points?
Parallel sides?
Perpendicular sides?
label each angle - right, acute, or obtuse**